

Your Name

Solutions

Your Signature

Instructor Name

Problem	Total Points	Score
1	8	
2	14	
3	12	
4	10	
5	16	
6	14	
7	12	
8	14	
Extra Credit	(5)	
Total	100	

- This test is closed notes and closed book.
- You may **not** use a calculator.
- In order to receive full credit, you must **show your work**. Be wary of doing computations in your head. Instead, write out your computations on the exam paper.
- Raise your hand if you have a question.

1. (8 points)

(a) Find the linearization of $f(x) = \sqrt[3]{x}$ at $a = 8$.

$$f(x) = x^{1/3}, \quad f(8) = 8^{1/3} = 2$$

$$f'(x) = \frac{1}{3}x^{-2/3}, \quad f'(8) = \frac{1}{3}(8^{-2/3}) = \frac{1}{3} \cdot \frac{1}{4} = \frac{1}{12}$$

$$y - 2 = \frac{1}{12}(x - 8)$$

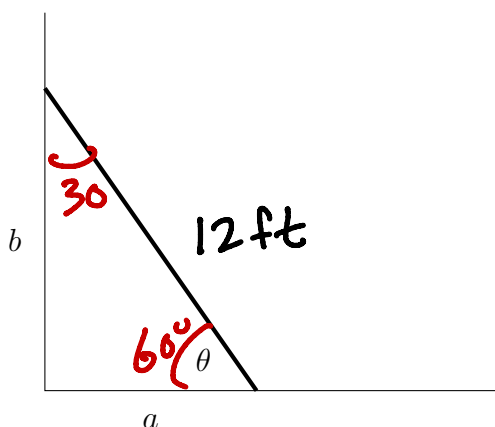
$$y = 2 + \frac{1}{12}(x - 8)$$

$$L(x) = 2 + \frac{1}{12}(x - 8)$$

(b) Use your result in part (a) to approximate $\sqrt[3]{7}$.

$$L(7) = 2 + \frac{1}{12}(7 - 8) = 2 - \frac{1}{12} = \frac{23}{12}$$

2. (14 points) A ladder 12 ft long is propped against a wall. At the moment the ladder makes a 60° angle to the ground, the bottom of the ladder is moving at a rate of 2 ft/sec away from the wall.



When $\theta = 60^\circ$

$$\frac{da}{dt} = 2 \text{ ft/s}$$

When $\theta = 60^\circ$, $a = 6 \text{ ft}$, $b = 6\sqrt{3} \text{ ft}$

Find the rate at which the top of the ladder is sliding down the wall at this same moment. Include units in your answer.

want $\frac{db}{dt}$.

$$12^2 = a^2 + b^2$$

differentiate implicitly with respect to t :

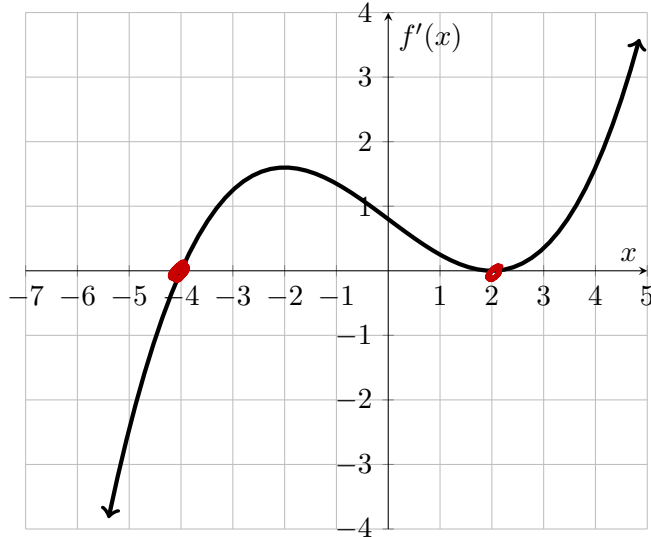
$$0 = 2a \frac{da}{dt} + 2b \frac{db}{dt}$$

$$0 = 2(6)(2) + 2(6\sqrt{3}) \frac{db}{dt}$$

$$-\frac{2}{\sqrt{3}} = \frac{db}{dt} \quad \text{in ft/sec}$$

3. (12 points)

The graph of the *derivative* f' of a function f is shown.



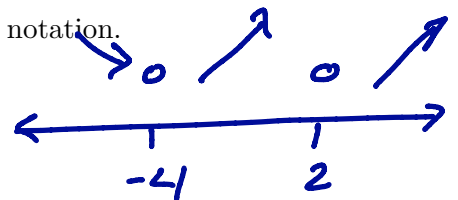
(a) Determine the critical points of $f(x)$.

$$x = -4, x = 2$$

(b) On what intervals is f increasing or decreasing? Use interval notation.

f increasing on $(-4, 2) \cup (2, \infty)$

f decreasing on $(-\infty, -4)$



(c) At what values of x does f have a local maximum or minimum?

local min at $x = -4$

no local max

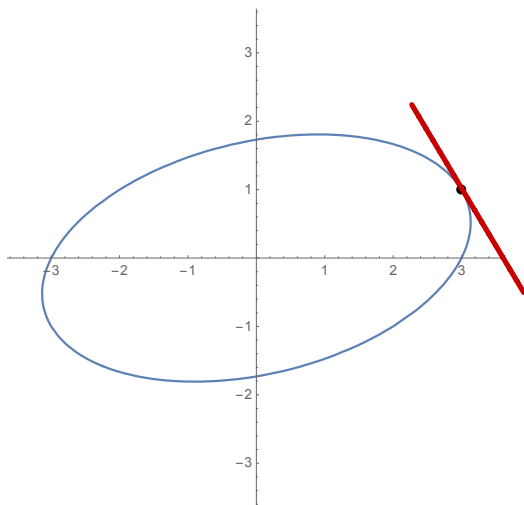
(d) On what intervals is f concave up or concave down? Use interval notation.

f concave up on $(-\infty, -2) \cup (2, \infty)$

f concave down on $(-2, 2)$

4. (10 points) Consider the curve given by the implicitly defined function

$$x^2 - xy + 3y^2 = 9$$



- (a) On the figure above, sketch the tangent line to the curve at the point (3, 1). ✓
- (b) Find the equation of the tangent line to the curve at the point (3, 1) (shown on the picture by the solid dot).

$$2x - y - x \frac{dy}{dx} + 6y \frac{dy}{dx} = 0$$

$$\frac{dy}{dx} = \frac{y - 2x}{6y - x}$$

at (3, 1),

$$\frac{dy}{dx} = \frac{1 - 2 \cdot 3}{6 \cdot 1 - 3} = \frac{-5}{3} = m \text{ (slope)}$$

$$y - 1 = -\frac{5}{3}(x - 3)$$

$$\boxed{y = 1 - \frac{5}{3}(x - 3)} \quad \text{or} \quad \boxed{y = -\frac{5}{3}x + 6}$$

5. (16 points) We want to sketch a graph of a function $f(x)$ with certain specified properties.

(a) Fill in the following tables. (You can use words or pictures.)

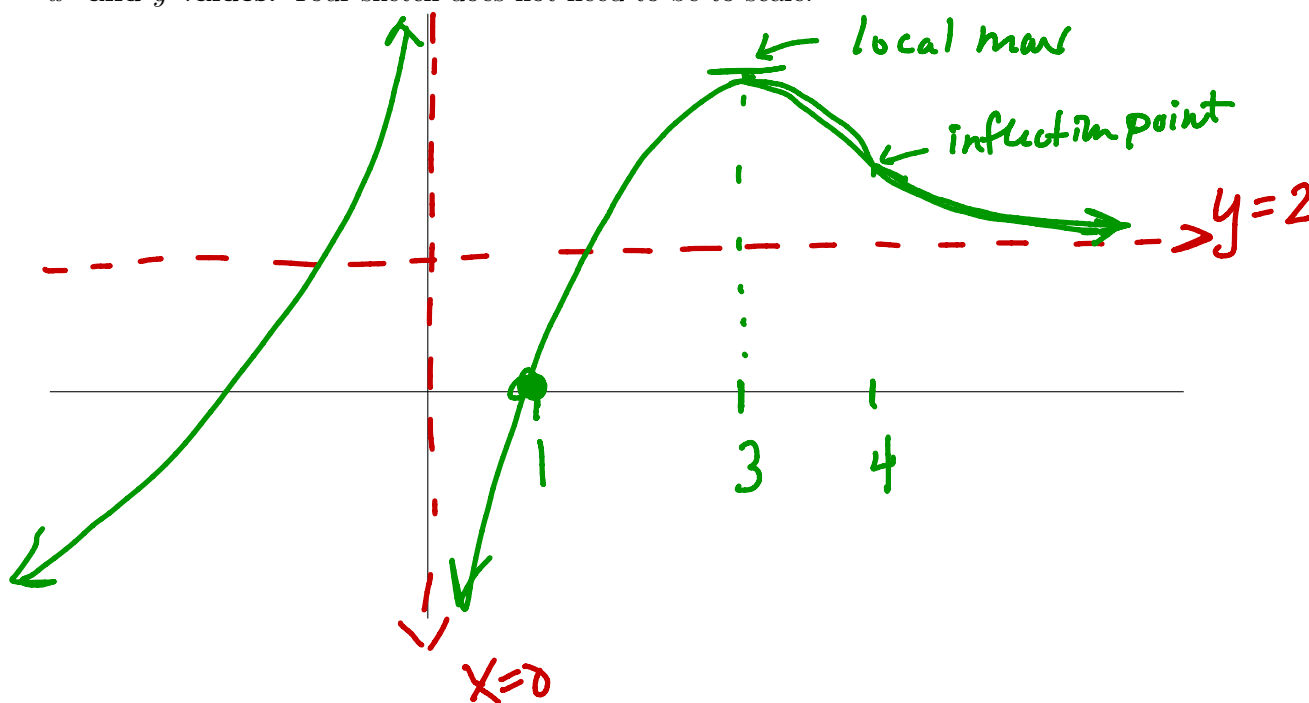
function information	what you conclude about the behavior of f
$\lim_{x \rightarrow 0^-} f(x) = \infty$ $\lim_{x \rightarrow 0^+} f(x) = -\infty$	vertical asymptote at $x=0$
$\lim_{x \rightarrow -\infty} f(x) = -\infty$	no horizontal asymptotes as $x \rightarrow -\infty$
$\lim_{x \rightarrow \infty} f(x) = 2$	horizontal asymptote at $y=2$
$f(1) = 0$	point $(1,0)$ on graph
$f'(3) = 0$	horizontal tangent at $x=3$

x	$-\infty < x < 0$	$0 < x < 3$	$3 < x < \infty$
sign of $f'(x)$	+	+	-
Behavior of $f(x)$	increasing ↗	increasing ↗	decreasing ↘

x	$-\infty < x < 0$	$0 < x < 4$	$4 < x < \infty$
sign of $f''(x)$	+	-	+
Behavior of $f(x)$	cup ∪	cdown ∩	cup ∪

local max at $x=3$

(b) Sketch the graph of f that has all of the properties listed in the tables. Label on the graph any local maxima and minima, any inflection points, any horizontal asymptotes and vertical asymptotes (draw with dashed lines, label with their equations), and any roots of the function that were specified in the table. Label the axes (add tick marks) to indicate important x - and y -values. Your sketch does not need to be to scale.

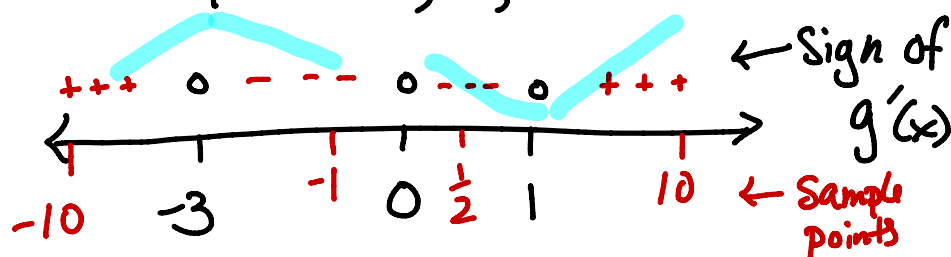


6. (14 points) Consider the function $g(x) = 2x^5 + 5x^4 - 10x^3 + 2$.

- (a) Determine all critical values of $g(x)$ and identify each value as the location of a local maximum, a local minimum, or neither. Justify your answer.

$$\begin{aligned} g'(x) &= 10x^4 + 20x^3 - 30x^2 \\ &= 10x^2(x^2 + 2x - 3) \\ &= 10x^2(x+3)(x-1) = 0 \end{aligned}$$

crit. pts: $x=0, -3, 1$.



local max at $x = -3$
local min at $x = 1$
neither at $x = 0$

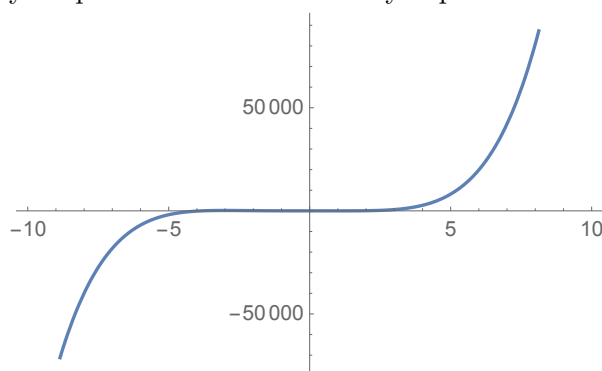
- (b) Consider $g(x)$ on the interval $[-1, 2]$. Determine the absolute maximum and minimum for $g(x)$ on that interval. (Hint: $g(2) = 66$)

on $[-1, 2]$, $x=0$ and $x=1$ are the only critical points

table	
x	$g(x)$
-1	$-2 + 5 + 10 + 2 = 15$
2	66
1	$2 + 5 - 10 + 2 = -1$
0	2

ANSWER: maximum is 66
minimum is -1

- (c) Below is a computer-generated plot of $g(x)$ on the intervals $[-10, 10]$. Does this plot contradict your previous answers? Briefly explain.



answer: No. It does not contradict previous answers.

explanation: The local min (at $x = 1$) and local max (at $x = -3$) are very small y -values compared to the computer generated scale of $\pm 50,000$

Said another way: The computer generated plot is "Zoomed out" so far you can't see the up & down between $x = -3$ and $x = 1$

optional.
From (a),
you know this
isn't a max/min

7. (12 points) Evaluate the limits below. Indicate a use of L'Hôpital's Rule by a symbol (such as **L'H** or **H**) over the equal sign.

(a) $\lim_{t \rightarrow 6} \frac{\sin(\pi t)}{t^2 - 36} \stackrel{\text{H}}{=} \lim_{t \rightarrow 6} \frac{\pi \cos(\pi t)}{2t} = \boxed{\frac{\pi}{12}}$

↑
form $\frac{0}{0}$

(b) $\lim_{x \rightarrow 0} \frac{x - 5 \cos(\pi x)}{4e^x} = \frac{0 - 5}{4e^0} = \boxed{-\frac{5}{4}}$

(Note: L'Hop not needed
and does not apply.)

form $\infty \cdot 0$
↓

(c) $\lim_{x \rightarrow \infty} x(8 - 8e^{\frac{1}{x}}) = \lim_{x \rightarrow \infty} \frac{8 - 8e^{\frac{1}{x}}}{\frac{1}{x}} \stackrel{\text{H}}{=} \lim_{x \rightarrow \infty} \frac{-8(-\frac{1}{x^2})e^{\frac{1}{x}}}{-\frac{1}{x^2}}$

Aside:

as $x \rightarrow \infty$, $\frac{1}{x} \rightarrow 0$
so $e^{\frac{1}{x}} \rightarrow e^0 = 1$

form $\frac{0}{0}$ ↑

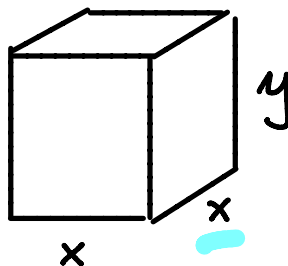
$= \lim_{x \rightarrow \infty} -8e^{\frac{1}{x}} = \boxed{-8}$

8. (14 points) A box with a square base must have a volume of 2500 in^3 . Wood for the base and sides costs $\$0.50$ per square inch and wood for the decorative top costs $\$2$ per square inch. What are the dimensions of the least expensive box?

(a) Draw and label a picture.

$$V = \text{volume} = x^2 y$$

$$= 2500 \text{ in}^3$$



(b) Explicitly state what it is you must minimize or maximize. (One or two words is sufficient.)

minimize Cost

(c) Write the quantity in part (b) as a function of one variable and state its domain.

$$C = \frac{1}{2}(x^2 + 4xy) + 2(x^2) = \frac{5}{2}x^2 + 2xy = \frac{5}{2}x^2 + 2x(2500x^{-2})$$

↑ $\$/\text{in}^2$ ↑ base ↑ sides ↑ $\$/\text{in}^2$ ↑ top

Since $2500 = x^2 y$,
we know $y = 2500x^{-2}$

plug in

$$C(x) = \frac{5}{2}x^2 + 5000x^{-1}$$

domain: $(0, \infty)$

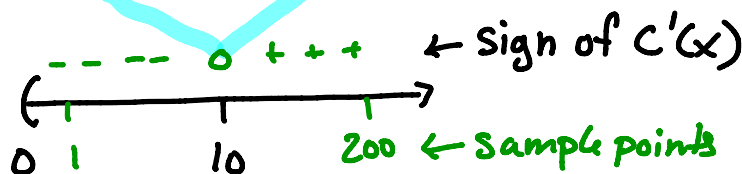
(d) Answer the question and justify your answer.

$$C'(x) = 5x - 5000x^{-2} = 0$$

$$5x = \frac{5000}{x^2}$$

$$x^3 = 1000$$

$$x = 10 \leftarrow \text{only crit. pt.}$$



Answer: dimensions: $10 \times 10 \times 25$

Justification: $C(x)$ has a local min at $x=10$ by the first derivative test. It has an absolute min because $x=10$ is the unique critical point.

Extra Credit: (5 points) Is the statement below TRUE or FALSE? Justify your answer.

Suppose $t > 0$. An antiderivative of

$$f(t) = \arcsin\left(\frac{1}{t}\right) - \frac{1}{\sqrt{t^2 - 1}}$$

is

$$F(t) = t \arcsin\left(\frac{1}{t}\right) - 4.$$

(We will show $F'(t) = f(t)$.)

$$F'(t) = 1 \cdot \arcsin(t^{-1}) + t \cdot \frac{1}{\sqrt{1 - (t^{-1})^2}} \cdot -t^{-2}$$

$$= \arcsin\left(\frac{1}{t}\right) - \frac{1}{t \sqrt{1 - \frac{1}{t^2}}}$$

$$= \arcsin\left(\frac{1}{t}\right) - \frac{1}{\sqrt{t^2 - 1}}$$

use
 $t = \sqrt{t^2}$
if $t > 0$