

Final Review - Chapter 5 (Antiderivatives and Applications of Anti-Differentiation)

Example 1: Find the most general antiderivative of the function.

a) $g(x) = \frac{1}{x} + \frac{1}{x^2 + 1}$

$$G(x) = \ln|x| + \arctan x + C$$

b) $f(x) = \frac{x^2 + \sqrt{x}}{x} = x + x^{-1/2}$

$$F(x) = \frac{1}{2}x^2 + 2x^{1/2} + C$$

Example 2: Given $f''(x) = 5x^3 + 6x^2 + 2$, $f(0) = 3$, $f(1) = -2$, find $f(x)$.

$$f'(x) = \int (5x^3 + 6x^2 + 2) dx = \frac{5}{4}x^4 + 2x^3 + 2x + C$$

$$f(x) = \int f'(x) dx = \int \left(\frac{5}{4}x^4 + 2x^3 + 2x + C \right) dx = \frac{1}{4}x^5 + \frac{1}{2}x^4 + x^2 + Cx + D$$

$$3 = f(0) = D. \text{ So } D = 3.$$

$$-2 = f(1) = \frac{1}{4} + \frac{1}{2} + 1 + C + 3$$

$$C = -6\frac{3}{4} = -2\frac{7}{4}$$

ans:

$$f(x) = \frac{1}{4}x^5 + \frac{1}{2}x^4 + x^2 - \frac{27}{4}x + 3$$

Example 3: A particle is moving with $v(t) = 2t - 1/(1+t^2)$ and $s(0) = 1$. Find the position of the particle.

$$v(t) = 2t - \frac{1}{1+t^2}$$

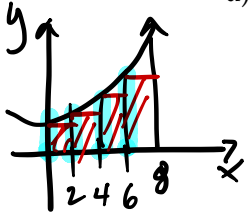
$$s(t) = \int v(t) dt = \int \left(2t - \frac{1}{1+t^2} \right) dt = t^2 - \arctan t + C$$

$$1 = s(0) = 0^2 - \arctan 0 + C = C. \text{ So } C = 1$$

So answer: $s(t) = t^2 - \arctan t + 1$

Example 4: Estimate the area under the curve $y = x^2 + 2$ on the interval $[0, 8]$ using 4 sub-intervals and the method given below.

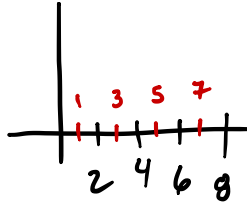
a) left endpoints.



$$\frac{40}{64} + \frac{24}{64}$$

$$\begin{aligned} L_4 &= 2(f(0) + f(2) + f(4) + f(6)) \\ &= 2(2 + 6 + 18 + 38) \\ &= 2(64) = 128 \end{aligned}$$

b) midpoints.



$$\begin{aligned} M_4 &= 2(f(1) + f(3) + f(5) + f(7)) \\ &= 2(3 + 11 + 27 + 51) \\ &= 2(92) = 184 \end{aligned}$$

$$+ \frac{30}{92}$$

Example 5: Evaluate the following definite integrals.

a) $\int_0^{\pi/4} \frac{\sec^2 t}{\tan t + 1} dt$

$$= \ln(\tan t + 1) \Big|_0^{\pi/4}$$

$$= \ln(\tan \frac{\pi}{4} + 1) - \ln(\tan 0 + 1)$$

$$= \ln 2 - \ln 1 = \ln 2$$

b) $\int_1^4 \frac{x-2}{\sqrt{x}} dx = \int_1^4 (x^{1/2} - 2x^{-1/2}) dx$

$$= \left[\frac{2}{3} x^{3/2} - 4x^{1/2} \right]_1^4$$

$$= \left(\frac{2}{3} (4)^{3/2} - 4(4)^{1/2} \right) - \left(\frac{2}{3} - 4 \right)$$

$$= \frac{16}{3} - 8 - \frac{2}{3} + 4 = \frac{14}{3} - 4 = \frac{2}{3}$$

↑
-12/3

Example 6: Find the most general anti-derivatives.

$$\begin{aligned} \text{a) } \int \left(\sec x \tan x + \frac{2}{\sqrt{1-x^2}} \right) dx \\ = \sec x + 2 \arcsin x + C \end{aligned}$$

$$\begin{aligned} \text{b) } \int \frac{x}{(x-2)^3} dx &= \int (u+2) u^{-3} du = \int u^{-2} + 2u^{-3} du \\ \text{let } u &= x-2 & &= -u^{-1} - u^{-2} + C \\ du &= dx & &= -(x-2)^{-1} - (x-2)^{-2} + C \\ x &= u+2 \end{aligned}$$

Example 7: Find the most general anti-derivatives.

$$\begin{aligned} \text{a) } \int \frac{\sin(1/x)}{x^2} dx &= -\int \sin u du \\ \text{let } u &= \frac{1}{x} = x^{-1} & &= \cos u + C \\ du &= -x^{-2} dx & &= \cos(x^{-1}) + C \\ -du &= x^{-2} dx = \frac{dx}{x^2} \end{aligned}$$

$$\begin{aligned} \text{b) } \int \frac{\cos^{-1} x}{\sqrt{1-x^2}} dx &= \int u du = \frac{1}{2} u^2 + C \\ \text{let } u &= \arccos x & &= \frac{1}{2} (\arccos x)^2 \\ du &= \frac{1}{\sqrt{1-x^2}} dx \end{aligned}$$

Example 8: Find the derivative of the following functions.

$$\begin{aligned} \text{a) } F(x) &= \int_2^{x^3} \sqrt{1+t^4} dt \\ F'(x) &= \sqrt{1+(x^3)^4} \cdot 3x^2 \\ &= 3x^2 \sqrt{1+x^{12}} \end{aligned}$$

$$\begin{aligned} \text{b) } H(x) &= \int_{e^x}^{x^2} \sec t dt = \int_{e^x}^0 \sec t dt + \int_0^{x^2} \sec t dt \\ &= -\int_0^{e^x} \sec t dt + \int_0^{x^2} \sec t dt \\ \text{Now } H'(x) &= -(\sec e^x) \cdot e^x + (\sec x^2) 2x \\ &= -e^x \sec(e^x) + 2x \sec x^2. \end{aligned}$$



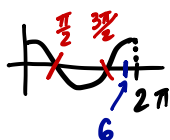
Example 9: A particle moves along a line with velocity function $v(t) = \cos t$, where v is measured in meters per second.

(a) Find the displacement over the time interval $[0, 6]$

$$\text{displacement} = \int_0^6 \cos t \, dt = \left[\sin t \right]_0^6 = \sin 6 - \sin 0 = \sin 6.$$

(b) Find the total distance traveled during the time interval $[0, 6]$

$$\text{Total distance} = \int_0^6 |\cos t| \, dt = \int_0^{\pi/2} \cos t \, dt - \int_{\pi/2}^{3\pi/2} \cos t \, dt + \int_{3\pi/2}^6 \cos t \, dt$$



$$\begin{aligned} &= \left[\sin t \right]_0^{\pi/2} - \left[\sin t \right]_{\pi/2}^{3\pi/2} + \left[\sin t \right]_{3\pi/2}^6 \\ &= \left[\sin\left(\frac{\pi}{2}\right) - \sin 0 \right] - \left[\sin\left(\frac{3\pi}{2}\right) - \sin\left(\frac{\pi}{2}\right) \right] + \left[\sin 6 - \sin\left(\frac{3\pi}{2}\right) \right] \\ &= 1 - [-1 - 1] + \sin 6 + 1 \\ &= 1 + 2 + \sin 6 + 1 \\ &= 4 + \sin 6 \end{aligned}$$

Example 10: A bacteria population is 4000 at time $t = 0$ and its rate of growth is 1000×2^t bacteria per hour after t hours. What is the population after one hour?

Let $P(t)$ be the population at time t .

Thus $P(0) = 4000$ and $P'(t) = 1000 \cdot 2^t$.

$$\text{So } P(1) = 4000 + \int_0^1 1000 \cdot 2^t \, dt = 4000 + 1000 \cdot \frac{1}{\ln 2} \cdot 2^t \Big|_0^1$$

$$= 4000 + \frac{1000}{\ln 2} \left(\underbrace{2^1 - 2^0}_{2-1=1} \right) = 4000 + \frac{1000}{\ln 2} \text{ bacteria}$$